



Solve each problem.

1) $2 + 2 = \underline{\quad}$

2) $5 + 0 = \underline{\quad}$

3) $3 + 0 = \underline{\quad}$

4) $1 + 1 = \underline{\quad}$

5) $4 + 1 = \underline{\quad}$

6) $2 + 3 = \underline{\quad}$

7) $1 + 4 = \underline{\quad}$

8) $1 + 2 = \underline{\quad}$

9) $4 + 0 = \underline{\quad}$

10) $1 + 3 = \underline{\quad}$

11) $5 - 4 = \underline{\quad}$

12) $5 - 3 = \underline{\quad}$

13) $5 - 2 = \underline{\quad}$

14) $5 - 5 = \underline{\quad}$

15) $3 - 3 = \underline{\quad}$

16) $4 - 3 = \underline{\quad}$

17) $4 - 1 = \underline{\quad}$

18) $3 - 2 = \underline{\quad}$

19) $1 - 1 = \underline{\quad}$

20) $4 - 2 = \underline{\quad}$

Answers

1. _____

2. _____

3. _____

4. _____

5. _____

6. _____

7. _____

8. _____

9. _____

10. _____

11. _____

12. _____

13. _____

14. _____

15. _____

16. _____

17. _____

18. _____

19. _____

20. _____



Solve each problem.

1) $2 + 2 = \underline{4}$

2) $5 + 0 = \underline{5}$

3) $3 + 0 = \underline{3}$

4) $1 + 1 = \underline{2}$

5) $4 + 1 = \underline{5}$

6) $2 + 3 = \underline{5}$

7) $1 + 4 = \underline{5}$

8) $1 + 2 = \underline{3}$

9) $4 + 0 = \underline{4}$

10) $1 + 3 = \underline{4}$

11) $5 - 4 = \underline{1}$

12) $5 - 3 = \underline{2}$

13) $5 - 2 = \underline{3}$

14) $5 - 5 = \underline{0}$

15) $3 - 3 = \underline{0}$

16) $4 - 3 = \underline{1}$

17) $4 - 1 = \underline{3}$

18) $3 - 2 = \underline{1}$

19) $1 - 1 = \underline{0}$

20) $4 - 2 = \underline{2}$

Answers

1. 4

2. 5

3. 3

4. 2

5. 5

6. 5

7. 5

8. 3

9. 4

10. 4

11. 1

12. 2

13. 3

14. 0

15. 0

16. 1

17. 3

18. 1


19. 0

20. 2




Solve each problem.


1) $2 + 2 = \underline{\quad}$




2) $5 + 0 = \underline{\quad}$




3) $3 + 0 = \underline{\quad}$




4) $1 + 1 = \underline{\quad}$




5) $4 + 1 = \underline{\quad}$




6) $2 + 3 = \underline{\quad}$




7) $1 + 4 = \underline{\quad}$




8) $1 + 2 = \underline{\quad}$




9) $4 + 0 = \underline{\quad}$



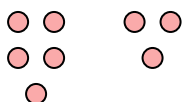
10) $1 + 3 = \underline{\quad}$



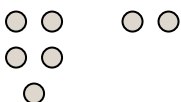
11) $5 - 4 = \underline{\quad}$



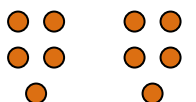
12) $5 - 3 = \underline{\quad}$




13) $5 - 2 = \underline{\quad}$




14) $5 - 5 = \underline{\quad}$



15) $3 - 3 = \underline{\quad}$



16) $4 - 3 = \underline{\quad}$



Answers

1. _____
2. _____
3. _____
4. _____
5. _____
6. _____
7. _____
8. _____
9. _____
10. _____
11. _____
12. _____
13. _____
14. _____
15. _____
16. _____